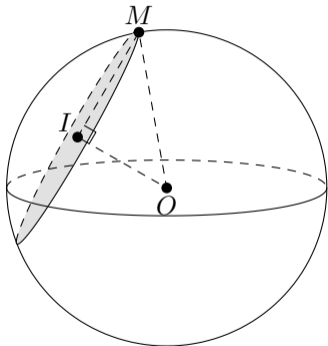
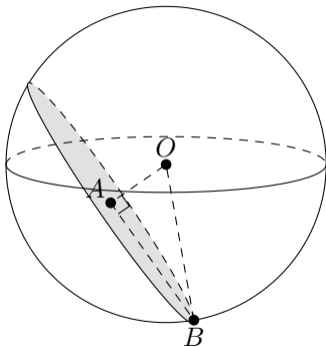


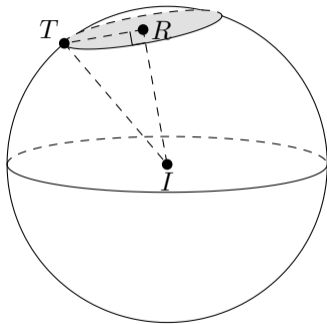
Dans chacun des cas suivants, calcule la longueur manquante.



$OM = 5 \text{ cm}$ ,  $OI = 4 \text{ cm}$ ,  $IM = ?$



$OB = 6 \text{ cm}$ ,  $AB = 5 \text{ cm}$ ,  $OA = ?$



$RT = 4 \text{ cm}$ ,  $IR = 8 \text{ cm}$ ,  $IT = ?$