

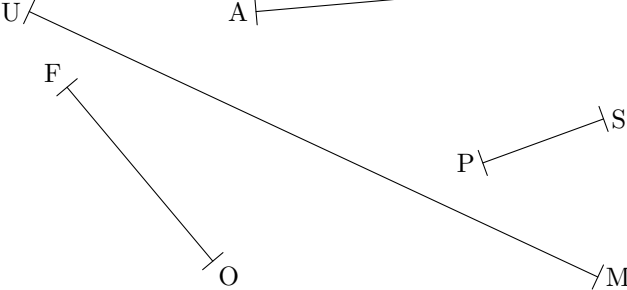
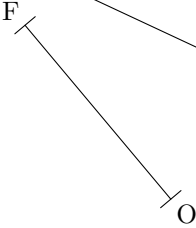


Segments	Nom du segment	Longueur du segment
	[AB]	$AB = \dots\dots \text{ mm} = \dots\dots \text{ cm}$
	[PS]	$PS = \dots\dots \text{ mm} = \dots\dots \text{ cm}$
	[UM]	$UM = \dots\dots \text{ mm} = \dots\dots \text{ cm}$
	[FO]	$FO = \dots\dots \text{ cm} = \dots\dots \text{ mm}$