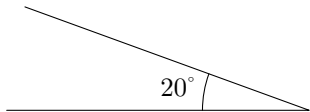
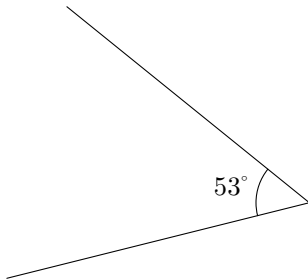


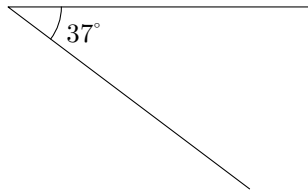
Après avoir fait les constructions nécessaires, détermine approximativement le cosinus des angles représentés ci-dessous.



$$\cos 20^\circ \approx \frac{\text{.....}}{\text{.....}} \approx \text{.....}$$



$$\cos 53^\circ \approx \frac{\text{.....}}{\text{.....}} \approx \text{.....}$$



$$\cos 37^\circ \approx \frac{\text{.....}}{\text{.....}} \approx \text{.....}$$